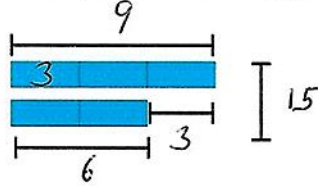
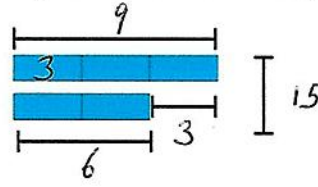


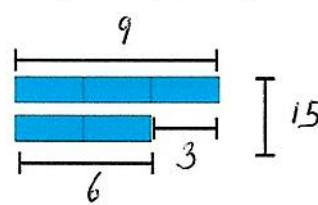
1. Alfie and Billy share 15 sweets in the ratio 3:2.
How many sweets does Billy get? **9**



2. Alfie and Billy share 15 sweets in the ratio 3:2.
How many more sweets does Alfie get? **9**



3. Alfie gets 15 sweets.
How many do they get altogether? **18**



4. Alfie gets 15 more sweets than Billy.
How many sweets does Billy get? **10**

